

# Number Trail Instructions

## How to play

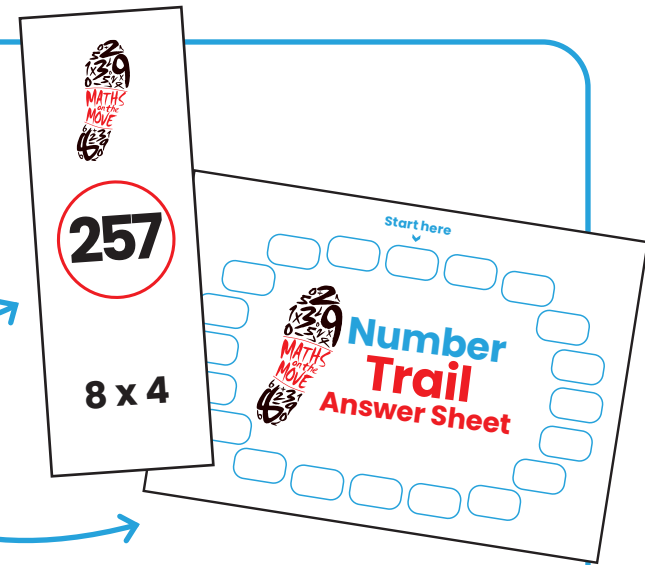
- Choose any number trail card to start.
- The bottom half of the card has a question on it.
- Work out the answer and record it in the first box of the number trail answer sheet.

The example question here is  $8 \times 4$ , and the answer (32) is recorded on the answer sheet.





## Preparation

- Cut out the number trail cards along the red dotted line. You should have 20 trail cards.
- Hide these randomly around the school hall or outdoor space.
- Give each child a number trail answer sheet.



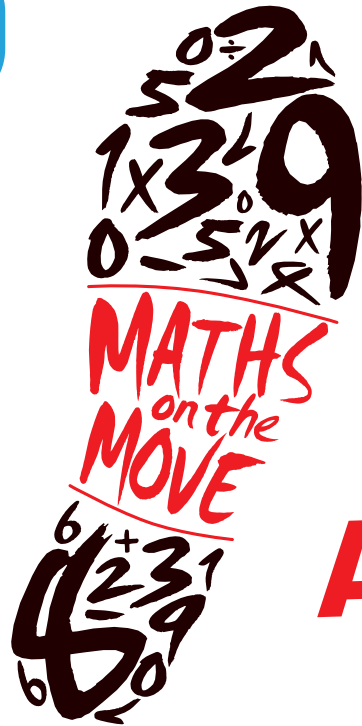
- Find the number trail card with the answer 32 in the circle.
- This card has a new question which will lead to another answer.
- The game is finished when all 20 boxes are complete on the trail answer sheet.

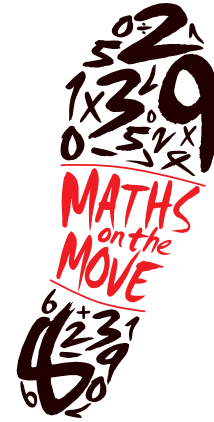
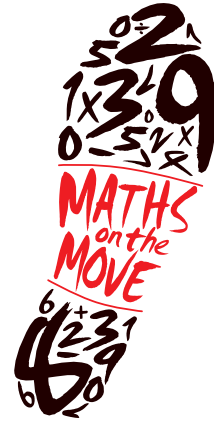
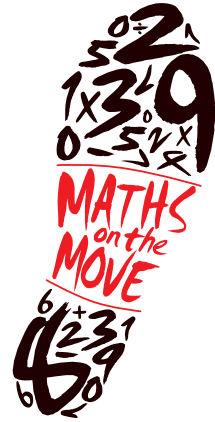



Start here



Number  
Trail  
Answer Sheet





**35**

**3**

**28**


**32**

**$8 - 5$**

**What is  
double 14?**

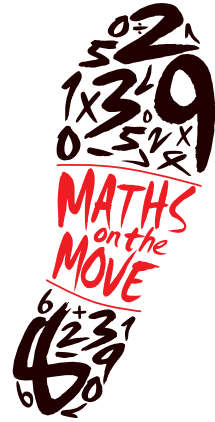
**Write  
thirty-two  
as a number**

**$4 + 6 + 7$**



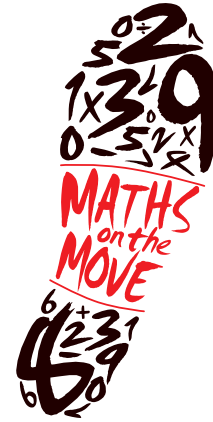
17

Which  
number  
is the  
smallest?  
64, 29, 46



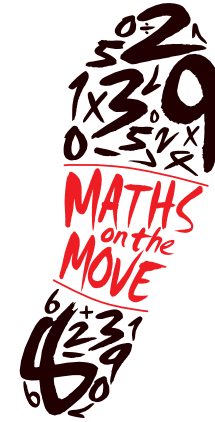
29

$$\underline{\quad} + 6 = 14$$




8

Write  
seventy-four  
as a number



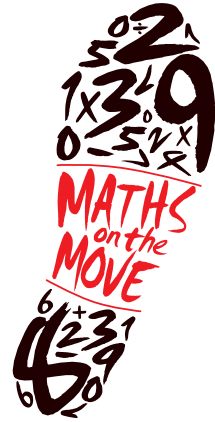
74

What is one  
less than 17?



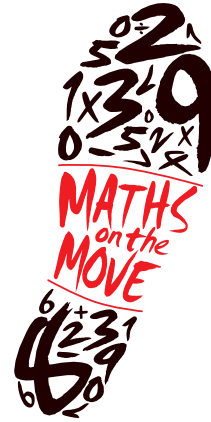
16

How much money is shown?



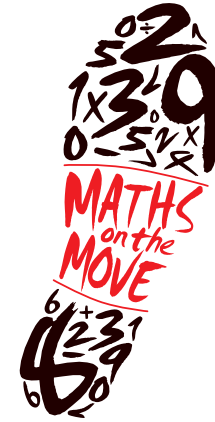
23p

What is the missing number?  
8, 10, 12, \_\_ ,  
16 , 18




14

How many tens are in the number 58?



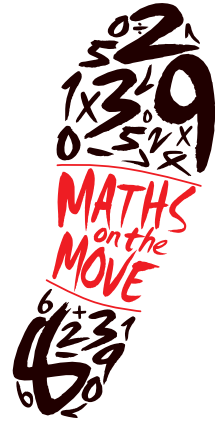
5

\_\_ + 3 = 15



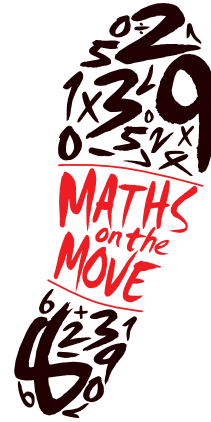
12

$17 - 4$



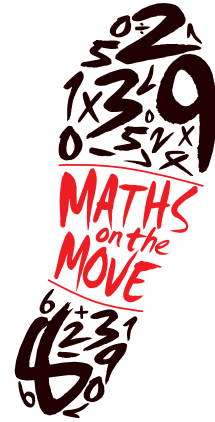
13

What is one  
more than 21?




22

$13 + 5$



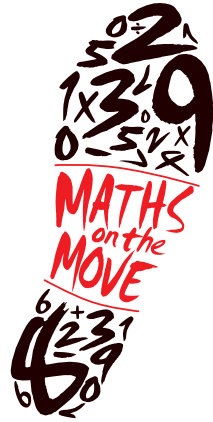
18

44 is one less  
than \_



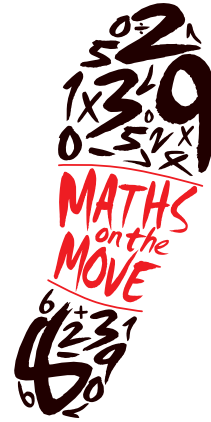
45

Which number  
is the smallest?  
29, 49, 19



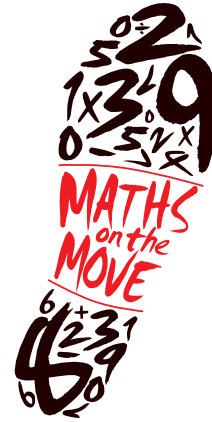
19

How much  
money is  
shown?



27p

$4 + 10 + 1$



15

5, 10, 15, 20,  
25, 30, \_\_, 40